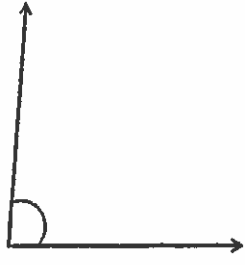


PRACTICE EXERCISES

1. Name each of the following angles as either right, reflex, straight, obtuse, or acute.

a)



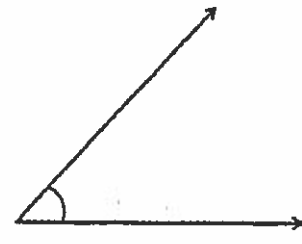
b)



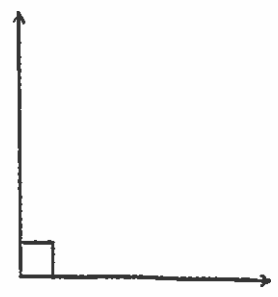
c)



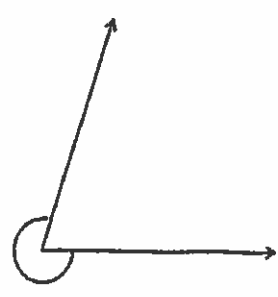
d)



e)

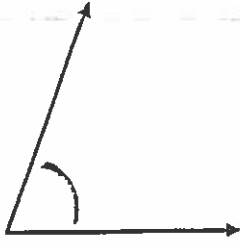


f)




Measure the following angles.

a)



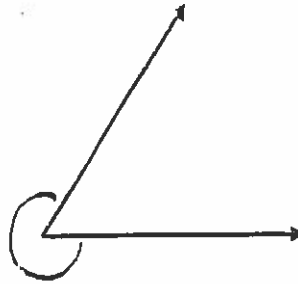
b)



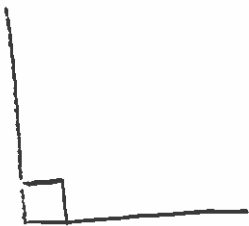
c)



d)



e)



3. Draw an angle that represents the following measurements. Label the arc.

a) 77 degrees

b) 134 degrees

c) 69 degrees

d) 145 degrees

e) 180 degrees